

# Imagine Schools Math Challenge

---



## **First Grade Answer Key**

When completing the problems we need to show all of our work and show all of our thinking. Compare your work to ours, especially if your answer is different than our answer. If the project listed is creative in its approach and each project created would be different, no answer is provided.

# Project #1

---

**Domain: Number and Operations in Base Ten (NBT)**

**1.NBT.1.** Count to 120, starting at any number less than 120. In this range, read and write numerals and represent a number of objects with a written numeral.

**Directions:**

- Fill in the Hundreds Chart below with the appropriate numbers.
- Next, use the hundreds chart to help you count to one hundred.
- Color all the numbers yellow that you would use to count by 2s to 100. (2, 4, 6, 8...)
- Color all the numbers green that you would use to count by 10s to 100. (10, 20...)
- Color all the numbers red that you would use to count by 5s to 100. (5, 10, 15...)

**(You will color in the 10s more than once, feel free to color it three times.)**

1	2	3	4	5	6	7	8	9	10
11	12	13	14	15	16	17	18	19	20
21	22	23	24	25	26	27	28	29	30
31	32	33	34	35	36	37	38	39	40
41	42	43	44	45	46	47	48	49	50
51	52	53	54	55	56	57	58	59	60
61	62	63	64	65	66	67	68	69	70
71	72	73	74	75	76	77	78	79	80
81	82	83	84	85	86	87	88	89	90
91	92	93	94	95	96	97	98	99	100

# Project #2


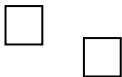
---

**Domain: Number and Operations in Base Ten (NBT)**

**1.NBT.1.** Count to 120, starting at any number less than 120. In this range, read and write numerals and represent a number of objects with a written numeral.

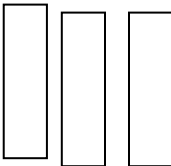
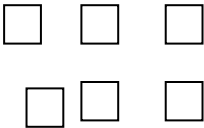
**1.NBT.2.** Understand that two digits of a two-digit number represent amounts of tens and ones.

You can represent the number 12 like this:

Tens	Ones
	

One long rectangle equals 10. A little square equals 1.

Now, try to show the number 36 in the same way:

Tens	Ones
	

Choose your own number and represent it below. Number: \_\_\_\_\_

Tens	Ones

# Project #3

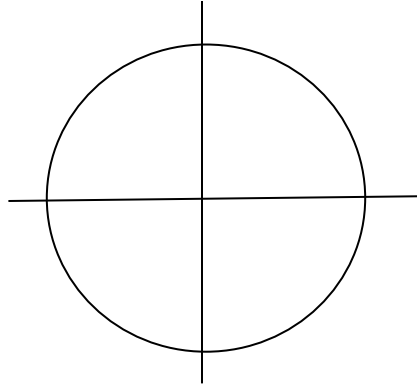
---

**Domain: Geometry (G)**

**1.G.3.** Partition circles and rectangles into two and four equal shares, describe the shares using the words halves, fourths, and quarters, and use the phrases half of, fourth of, and quarter of. Describe the whole as two of, or four of the shares. Understand for these examples that decomposing into more equal shares creates smaller shares.

**Directions:**

Divide the circle to the right into 4 equal parts (or 4 quarters).



Find something in your home that you can divide into equal parts. For example, you could cut a cupcake into two equal parts. Or, you could split a candy bar into two equal parts. Write a sentence below about what you chose and how you divided it into equal parts.

# Project #4

---

**Domain: Operations and Algebraic Thinking (OA)**

**1.OA.1.** Use addition and subtraction within 20 to solve word problems...

**Directions:**

Write a word problem with numbers that add up to less than 20. Solve the problem below.

**Example:**

Word Problem: I had 15 gummy bears. My sister gave me 4 more. How many do I have now?

Answer:  $15 + 4 = 19$ . I drew a picture to help me solve the problem.

$$\square\square\square\square + \square\square\square\square + \square\square\square\square = 19$$

**Your Turn!**

Word Problem:

Answer:

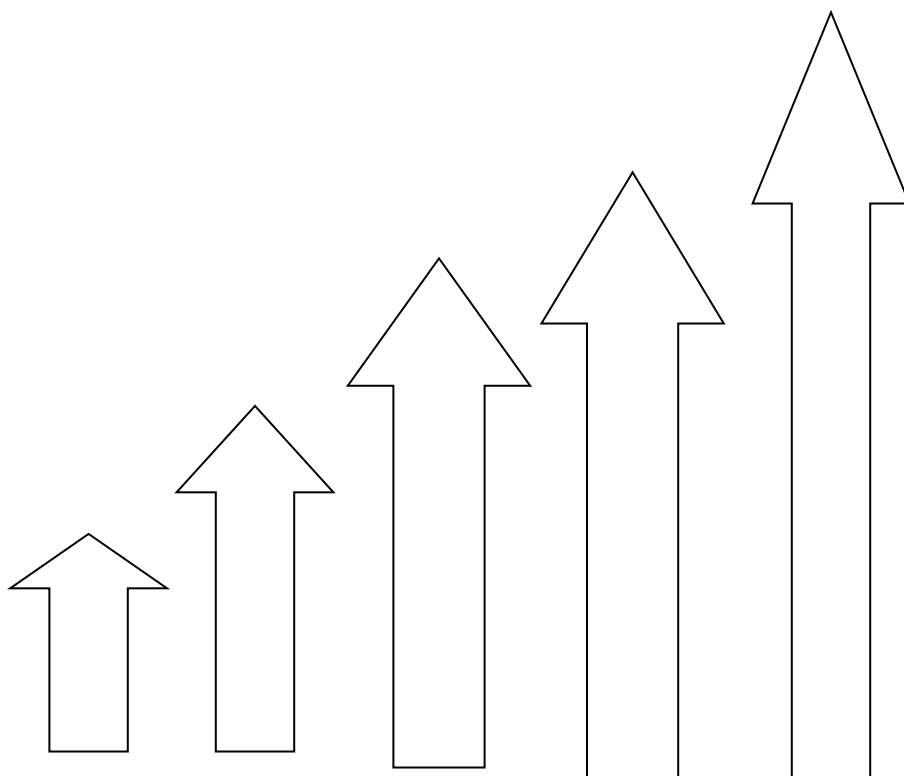
# Project #5

---

**Domain: Measurement and Data (MD)**

**1.MD.1.** Order three objects by length; compare the lengths of two objects indirectly by using a third object.

**Directions:** Cut out the arrows below and arrange them in order from shortest to tallest.



# Project #6

---

**Domain: Operations and Algebraic Thinking (OA)**

**1.OA.8.** Determine the unknown whole number in an addition or subtraction equation relating three whole numbers. For example, determine the unknown number that makes the equation true in each of the equations  $8 + ? = 11$ ,  $5 = ? - 3$ ,  $6 + 6 = ?$ .

**Directions:** Create a change diagram using the model below.

Start	Change	End
10	+5	15
6	-3	3
4	+4	8
12	-6	6





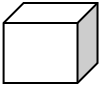
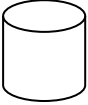
# Project #7

---

**Domain: Geometry (G)**

**1.G.1.** Distinguish between defining attributes (e.g., triangles are closed and three-sided) versus non-defining attributes (e.g., color, orientation, overall size); build and draw shapes to possess defining attributes.

**Directions:** Complete the chart below.

Name of Shape	Draw the Shape	Number of Sides	Number of Corners	The name of something in your home that has this shape
Square		4	4	Napkin
Triangle		3	3	Party hat
Rectangle		4	4	Table
Circle		0	0	Table/Clock/Plate
Cube		6	8	Box
Cylinder		2	0	Oatmeal container





# Project #8

**Domain: Geometry (G)**

**1.G.3.** Compose two-dimensional shapes (rectangles, squares, trapezoids, triangles, half-circles, and quarter-circles) or three dimensional shapes (cubes, right rectangular prisms, right circular cones, and right circular cylinders) to create a composite shape, and compose new shapes from the composite shape.

**Directions:** Cut out the pictures on the bottom of this page and glue them into the correct section of the table below.

Whole	Parts of a Whole (1/2)
	

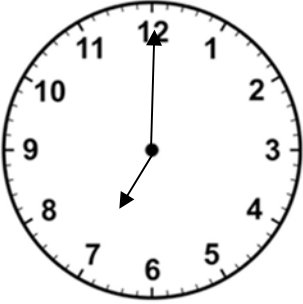
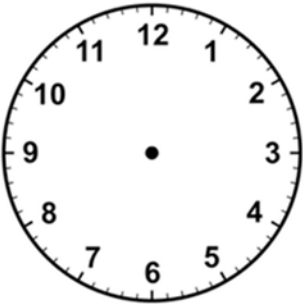
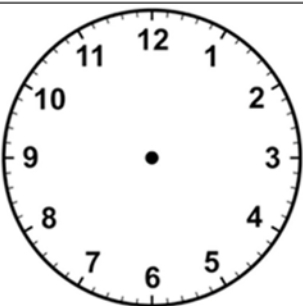
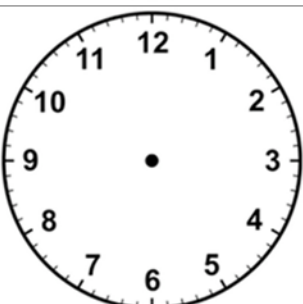
# Project #9

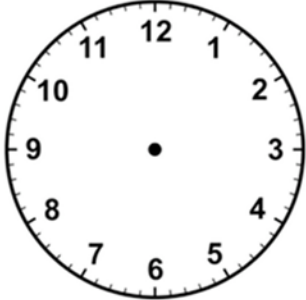
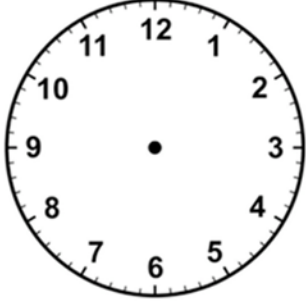
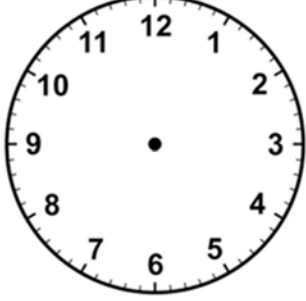
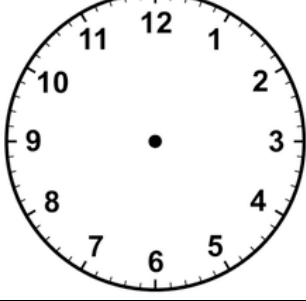
---

**Domain: Measurement and Data (MD)**

**1. MD.3.** Tell and write time in hours and half-hours using analog and digital clocks.

**Directions:** Assist your child in creating a schedule of a typical week day. Help your child round to the nearest half-hour.

Activity	Draw Time on the Clock	Write the Time
Example: Wake Up	 An analog clock face with numbers 1 through 12. The hour hand points to 7 and the minute hand points to 12.	7:00
	 A blank analog clock face with numbers 1 through 12 and a central dot.	
	 A blank analog clock face with numbers 1 through 12 and a central dot.	
	 A blank analog clock face with numbers 1 through 12 and a central dot.	

# Project #10

---

**Domain: Operations and Algebraic Thinking (OA)**

**1.OA.1.** Use addition and subtraction within 20 to solve word problems involving situations of adding to, taking from, putting together, taking apart, and comparing, with unknowns in all positions, e.g., using objects, drawings, and equations with a symbol for the unknown number to represent the problem.

**Directions:** Solve the following word problems. Show your work. Write the number sentence you used to solve the problem.

**Marisa had 18 cars after her Grandma gave her 5 for her birthday. How many cars did she have before her birthday?**

$$18 - 5 = 13$$

Marisa had 13 cars before her birthday.

**Brian lost 6 toy airplanes at the playground. Before he went to the playground he had 15 airplanes. How many airplanes does he have now that he has lost some?**

$$15 - 6 = 9$$

Brian had 9 cars after he lost some.

# Project #11

---

**Domain: Operations and Algebraic Thinking (OA)**

**1.OA.7.** Understand the meaning of the equal sign, and determine if equations involving addition and subtraction are true or false. *For example, which of the following equations are true and which are false?  $6=6$ ,  $7=8-1$ ,  $5+2=2+5$ ,  $4+1=5+2$ .*

**Directions:** Write True or False next to each equation.

\_\_\_ True \_\_\_  $8 = 8$

\_\_\_ True \_\_\_  $16 = 8 + 8$

\_\_\_ False \_\_\_  $14 = 6 + 7$

\_\_\_ True \_\_\_  $6 + 1 = 1 + 6$

\_\_\_ True \_\_\_  $2 + 2 = 1 + 3$

\_\_\_ True \_\_\_  $12 + 1 = 10 + 3$

# Project # 12

---

**Domain: Measurement and Data (MD)**

**1.MD.2.** Express the length of an object as a whole number of length units, by laying multiple copies of a shorter object (the length unit) end to end; understand that the length measurement of an object is the number of same-size length units that span it with no gaps or overlaps. Limit to contexts where the object being measured is spanned by a whole number of length units with no gaps or overlaps.

**Directions:** Use a ruler AND toothpicks or paperclips to measure the length of the following items. Before you measure, estimate (make a good guess) of how long you think the object might be. You can pick your own items to measure for the last six rows in the table.

Object	Estimate how many inches long you think it might be	Measurement with a Ruler	Estimate how many toothpicks and/or paper clips long	Measurement with Toothpicks and/or Paper clips
Desk	15 inches	18 inches	10 toothpicks long	About 8 toothpicks long
Water bottle				

# Project #13

---

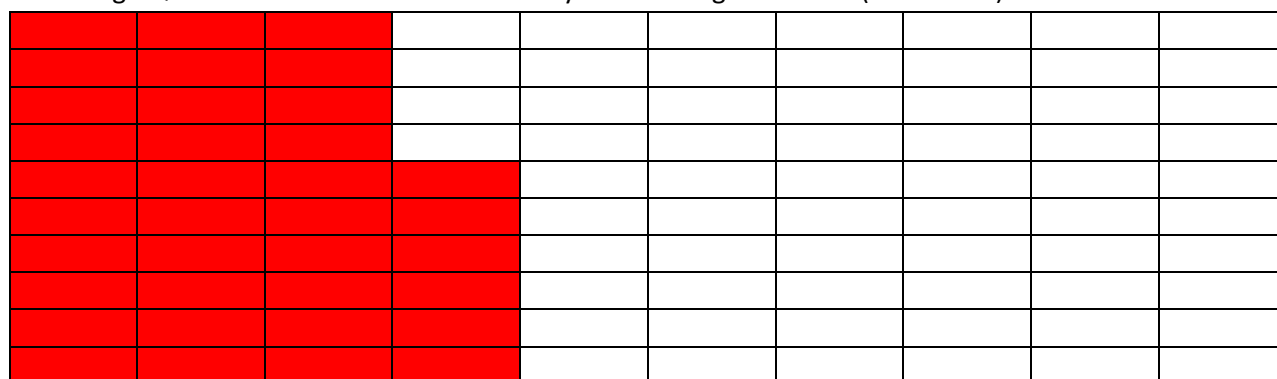
**Domain: Number and Operations in Base Ten (NBT)**

**1.NBT.4.** Add within 100, including adding a two-digit number and a one-digit number, and adding a two-digit number and a multiple of 10, using concrete models or drawings and strategies based on place value, properties of operations, and/or the relationship between addition and subtraction; relate the strategy to a written method and explain the reasoning used. Understand that adding two-digit numbers, one adds tens and ones, ones and ones; and sometimes it is necessary to decompose a ten.

**Directions:** Color in the hundreds frame below to represent your answer to each addition problem.

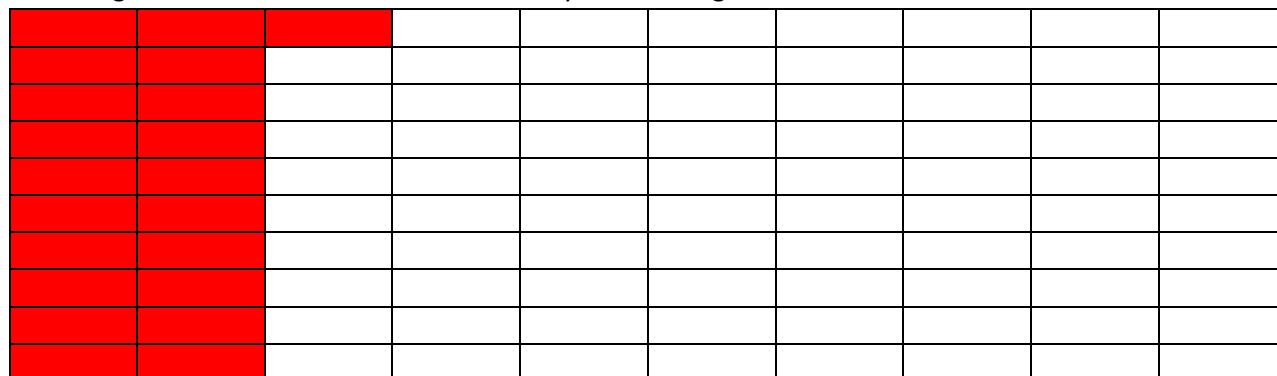
Example:  $10 + 26 = 36$

Challenge Question: How much more would you need to get to 100? (Answer 54)



Show the equation  $15 + 6 = 21$  using the hundreds frame below.

Challenge Question: How much more would you need to get to 100? **79**



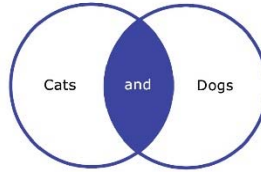
Show the equation  $23 + 7 = 30$  on the hundreds frame below.

Challenge Question: How much more would you need to get to 100? **70**




# Project # 14

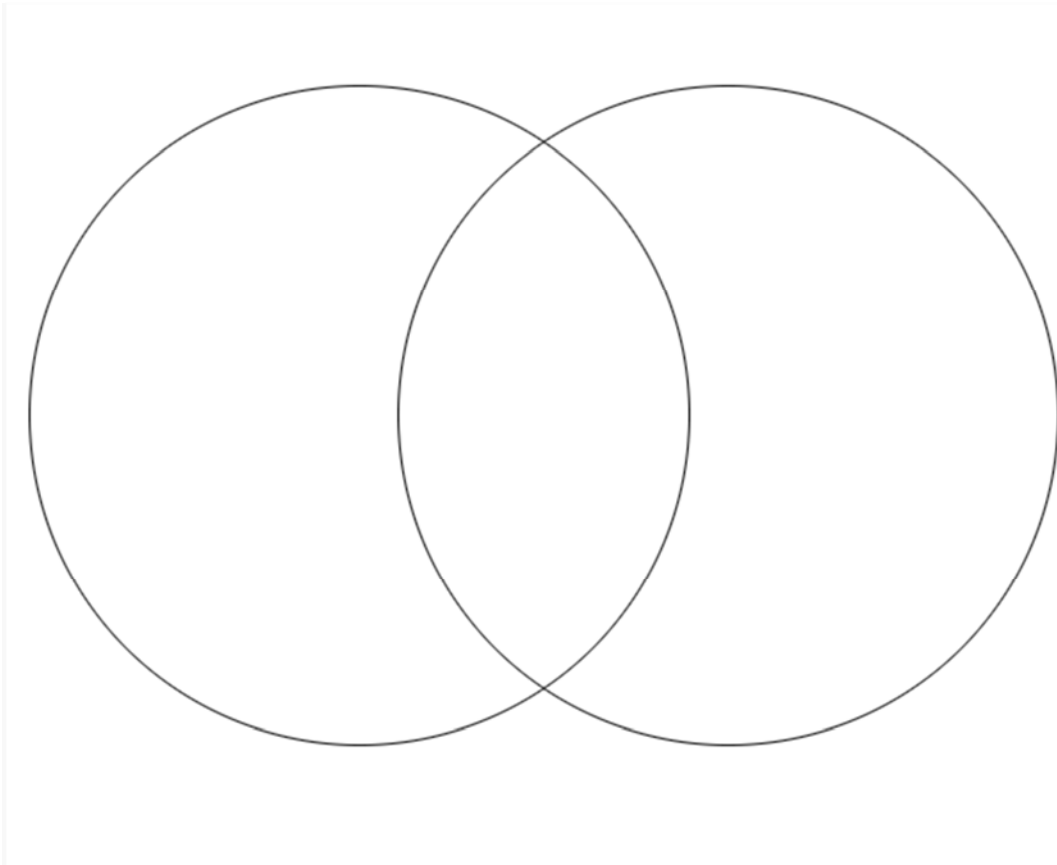
---



**Domain: Measurement and Data (MD)**

**1.MD.4.** Organize, represent, and interpret data with up to three categories; ask and answer questions about the total number of data points, how many in each category, and how many more or less are in one category than in another.

**Directions:** Create a Venn Diagram on a topic of your choosing. Remember to give your Venn Diagram a title and label each section.

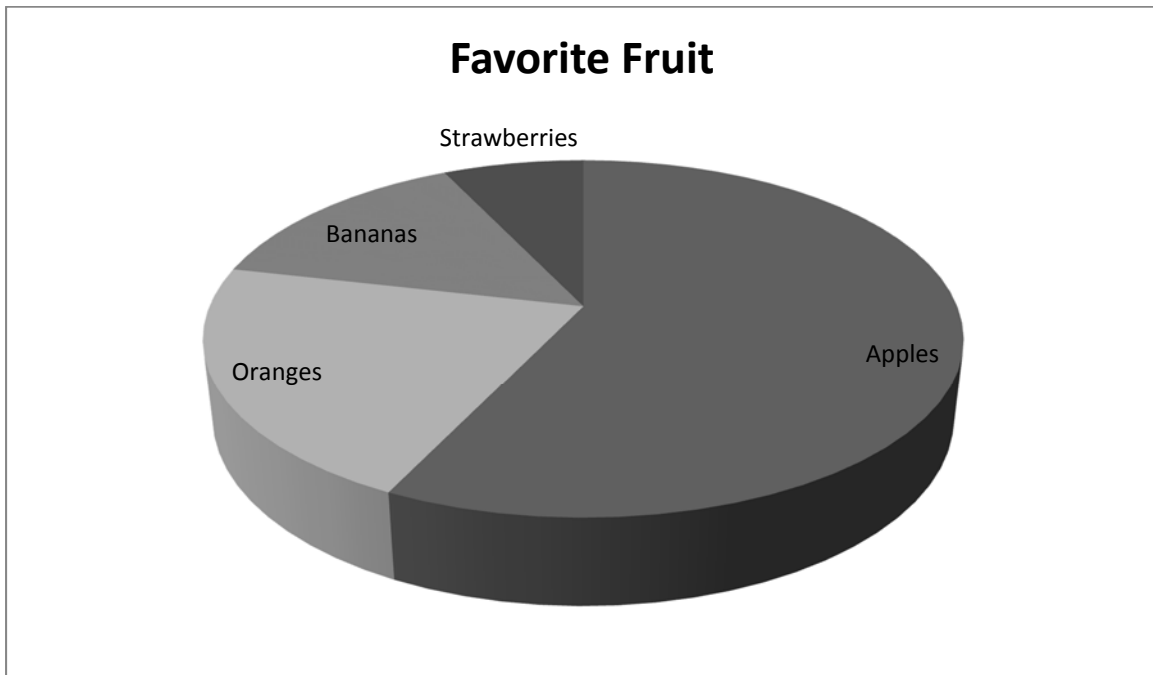


# Project # 15

---

**Domain: Measurement and Data (MD)**

**1.MD.4.** Organize, represent, and interpret data with up to three categories; ask and answer questions about the total number of data points, how many in each category, and how many more or less are in one category than in another.



**Directions:** Your class voted on their favorite fruit. Then, your class made the pie graph above. Answer the following questions based on the graph:

- 1) Which did your class like more: apples or oranges? How do you know?  
*Apples. Apples take up more space on the graph representing more people liking apples.*
- 2) Which kind of fruit was liked the least? How do you know?  
*Strawberries. The strawberries section takes up the least amount of space on the graph.*
- 3) Challenge: Poll your family (or 10 people) to find out their favorite fruit, and create a graph to represent results.

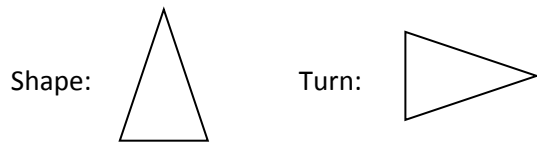
# Project # 16

---

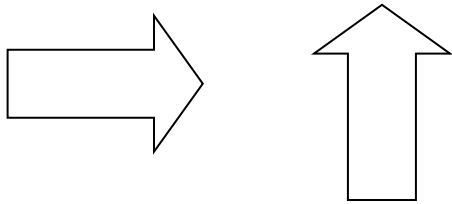
**Domain: Geometry (G)**

**1.G.1.** Distinguish between defining attributes (e.g., triangles are close and three-sides) versus non-defining attributes (e.g., color orientation, overall size); build and draw shapes to possess defining attributes.

**Directions:** Draw a turn of the shape below. See the following example:



Draw a turn of the following shape:



Draw your own shape and then draw a turn of it.

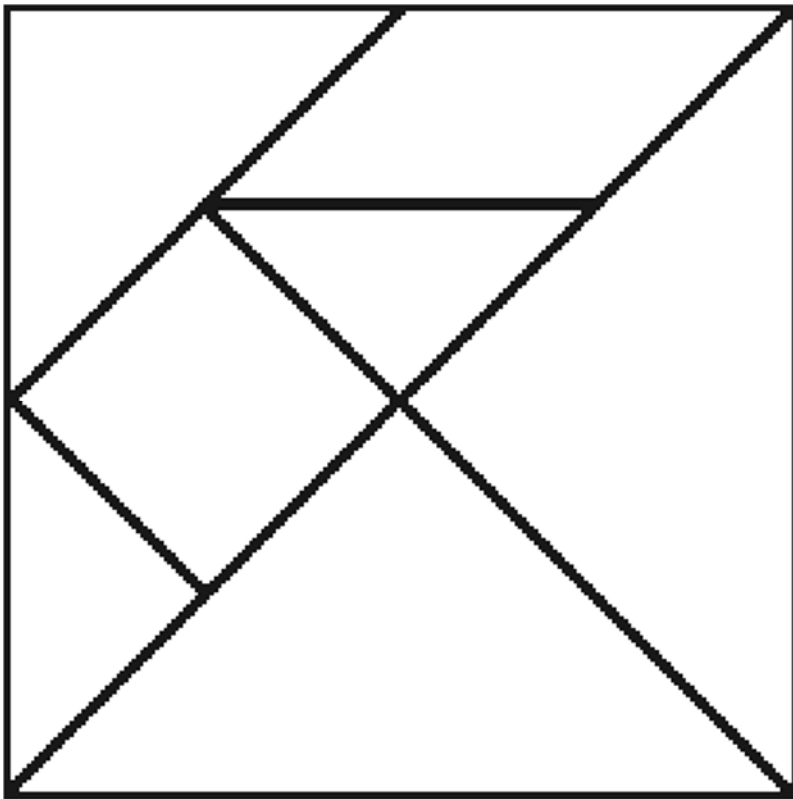
# Project # 17

---

**Domain: Geometry (G)**

**1.G.2.** Compose two-dimensional shapes (rectangles, squares, trapezoids, triangles, half-circles, and quarter-circles) or three dimensional shapes (cubes, right rectangular prisms, right circular cones, and right circular cylinders) to create a composite shape, and compose new shapes from the composite shape.

**Directions:** Cut out the tan grams below along the black lines. When you are finished cutting you should have 6 shapes: 2 Large Triangles, 1 medium sized triangle, 2 small triangles, one square, and one parallelogram. Use the tan grams to build new shapes.



# Extension

---

The following activities are based on standards your student will learn in second grade. They may be challenging for your student.

## Project # 18

---

### Domain: Number and Operations in Base Ten (NBT)

**2.NBT.1** Understand that the three digits of a three-digit number represent amounts of hundreds, tens, and ones; e.g., 706 equals 7 hundreds 0 tens and 6 ones.

**Directions:** Demonstrate the word and symbol that represents a number value using the process demonstrated below.

Number: 792

Hundreds	Tens	Ones
7	9	2

Think: 7 hundreds + 9 tens + 2 ones

Write:  $700 + 90 + 2$

Say: seven hundred ninety-two

Now you try:

Number: 531

Hundreds	Tens	Ones
5	3	1

Think: *5 hundreds + 3 tens + 1 one*

Write:  $500 + 30 + 1$

Say: *five hundred thirty one*

Choose your own number!

Number: \_\_\_\_\_

Hundreds	Tens	Ones

Think: \_\_\_\_\_

Write: \_\_\_\_\_

Say: \_\_\_\_\_

# Project #19

---

**Domain: Measurement and Data (MD)**

**2.MD.8.** Solve word problems involving dollar bills, quarters, dimes, nickels, and pennies, using \$ and cents symbols appropriately. Example: If you have 2 dimes and 3 pennies, how many cents do you have?

**Directions:** Review the following chant with your child about coins. Read the chant to your child, then read it with them while helping them point to each word as you say it. Give your child one penny, one nickel, one dime, and one quarter. Ask them to identify each coin. Then, fill in the chart below.

Extension: If there is ever an opportunity for your child to help you count change, allow them to do so.



## ***Penny, Penny***

**Penny, penny, easily spent -  
Copper brown and worth one cent.**

**Nickel, Nickel, thick and fat.  
It's worth 5 cents – I know that.**

**Dime, dime, little and thin.  
I remember – you're worth 10.**

**Quarter, quarter, big and bold.  
It's worth 25 – I am told!**

<b>Picture of Coin</b>	<b>Name</b>	<b>Worth</b>
	<b>Penny</b>	<b>1 cent</b>
<i>No picture of dime available due to copyright</i>	<b>Nickel</b>	<b>5 cents</b>
<i>No picture of dime available due to copyright</i>	<b>Dime</b>	<b>10 cents</b>
	<b>Quarter</b>	<b>25 cents</b>